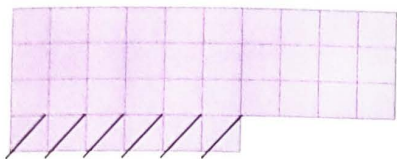




1 Prečrtaj kvadratke in izračunaj.



$$36 - 6 = \underline{\quad}$$



$$54 - 4 = \underline{\quad}$$



$$47 - 7 = \underline{\quad}$$

$$16 - 6 = \underline{\quad}$$

$$33 - 3 = \underline{\quad}$$

$$72 - 2 = \underline{\quad}$$

$$66 - 6 = \underline{\quad}$$

$$27 - 7 = \underline{\quad}$$

$$95 - 5 = \underline{\quad}$$

$$96 - 6 = \underline{\quad}$$

$$81 - 1 = \underline{\quad}$$

$$18 - 8 = \underline{\quad}$$

2 Lučka je imela v denarnici 22 €. Iz denarnice ji je padel kovanec za 2 €. Koliko denarja še ima Lučka?

Račun: _____

Odgovor: Lučka ima še _____ evrov.



3 Izračunaj.

$$77 - 7 = \underline{\quad}$$

$$23 + 5 = \underline{\quad}$$

$$11 + 9 = \underline{\quad}$$

$$99 - 9 = \underline{\quad}$$

$$62 + 7 = \underline{\quad}$$

$$12 - 7 = \underline{\quad}$$

$$45 - 5 = \underline{\quad}$$

$$98 + 0 = \underline{\quad}$$

$$15 - 9 = \underline{\quad}$$

$$68 - 8 = \underline{\quad}$$

$$66 + 1 = \underline{\quad}$$

$$7 + 7 = \underline{\quad}$$

$$44 - 4 = \underline{\quad}$$

$$71 + 8 = \underline{\quad}$$

$$9 + 4 = \underline{\quad}$$

4 Nariši 3 kroge, 2 trikotnika in pravokotnik.

